



This is “IS-LM”, chapter 21 from the book [Finance, Banking, and Money \(index.html\)](#) (v. 1.0).

This book is licensed under a [Creative Commons by-nc-sa 3.0](http://creativecommons.org/licenses/by-nc-sa/3.0/) license. See the license for more details, but that basically means you can share this book as long as you credit the author (but see below), don't make money from it, and do make it available to everyone else under the same terms.

This content was accessible as of December 29, 2012, and it was downloaded then by [Andy Schmitz](#) (<http://lardbucket.org>) in an effort to preserve the availability of this book.

Normally, the author and publisher would be credited here. However, the publisher has asked for the customary Creative Commons attribution to the original publisher, authors, title, and book URI to be removed. Additionally, per the publisher's request, their name has been removed in some passages. More information is available on this project's [attribution page](http://2012books.lardbucket.org/attribution.html?utm_source=header).

For more information on the source of this book, or why it is available for free, please see [the project's home page](#) (<http://2012books.lardbucket.org/>). You can browse or download additional books there.

# Chapter 21

---

## IS-LM

### CHAPTER OBJECTIVES

By the end of this chapter, students should be able to:

1. Explain this equation:  $Y = Y_{ad} = C + I + G + NX$ .
2. Provide the equation for  $C$  and explain its importance.
3. Describe the Keynesian cross diagram and explain its use.
4. Describe the investment-savings (IS) curve and its characteristics.
5. Describe the liquidity preference–money (LM) curve and its characteristics.
6. Explain why equilibrium is achieved in the markets for goods and money.
7. Explain the IS-LM model's biggest drawback.

## 21.1 Aggregate Output and Keynesian Cross Diagrams

### LEARNING OBJECTIVES

1. What does this equation mean:  $Y = Y_{ad} = C + I + G + NX$ ?
2. Why is this equation important?
3. What is the equation for C and why is it important?
4. What is the Keynesian cross diagram and what does it help us to do?

*Developed in 1937 by economist and Keynes disciple John Hicks, the IS-LM model is still used today to model aggregate output (gross domestic product [GDP], gross national product [GNP], etc.) and interest rates in the short run.* [http://en.wikipedia.org/wiki/John\\_Hicks](http://en.wikipedia.org/wiki/John_Hicks)  
It begins with John Maynard Keynes's recognition that

$$Y = Y_{ad} = C + I + G + NX$$

where:

$Y$  = aggregate output (supplied)

$Y_{ad}$  = aggregate demand

$C$  = consumer expenditure

$I$  = investment (on new physical capital like computers and factories, and planned inventory)

$G$  = government spending

$NX$  = net exports (exports minus imports)

*Keynes further explained that  $C = a + (mpc \times Y_d)$*

where:

$Y_d$  = disposable income, all that income above a

$a$  = autonomous consumer expenditure (food, clothing, shelter, and other necessities)

$mpc$  = marginal propensity to consume (change in consumer expenditure from an extra dollar of income or “disposable income;” it is a constant bounded by 0 and 1)

Practice calculating  $C$  in Exercise 1.

## EXERCISES

1. Calculate consumer expenditure using the formula  $C = a + (mpc \times Y_d)$ .

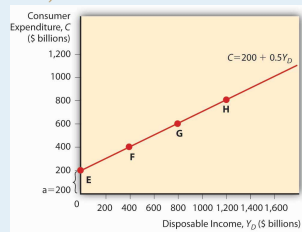
Autonomous Consumer Expenditure	Marginal Propensity to Consume	Disposable Income	Answer: C
200	0.5	0	200
400	0.5	0	400
200	0.5	200	300
200	0.5	300	350
300	0.5	300	450
300	0.75	300	525
300	0.25	300	375
300	0.01	300	303
300	1	300	600
100	0.5	1000	600
100	0.75	1000	850

You can plot a **consumption function**<sup>1</sup> by drawing a graph, as in [Figure 21.1 "A consumption function"](#), with consumer expenditure on the vertical axis and disposable income on the horizontal.

(Autonomous consumer expenditure  $a$  will be the intercept and  $mpc \times Y_d$  will be the slope.)

1. A mathematical equation thought to express the level of consumer spending.

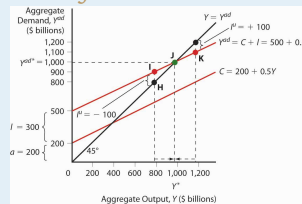
**Figure 21.1**  
A consumption function



Investment is composed of so-called fixed investment on equipment and structures and planned inventory investment in raw materials, parts, or finished goods.

For the present, we will ignore G and NX and, following Keynes, changes in the price level. (Remember, we are talking about the short term here. Remember, too, that Keynes wrote in the context of the gold standard, not an inflationary free floating regime, so he was not concerned with price level changes.) The simple model that results, called a Keynesian cross diagram, looks like the diagram in Figure 21.2 "A Keynesian cross diagram".

**Figure 21.2**  
A Keynesian cross diagram



The 45-degree line simply represents the equilibrium  $Y = Y_{ad}$ . The other line, the aggregate demand function, is the consumption function line plus planned investment spending  $I$ . Equilibrium is reached via inventories (part of  $I$ ). If  $Y > Y_{ad}$ , inventory levels will be higher than firms want, so they'll cut production. If  $Y < Y_{ad}$ , inventories will shrink below desired levels and firms will increase production. We can now predict changes in aggregate output

given changes in the level of  $I$  and  $C$  and the marginal propensity to consume (the slope of the  $C$  component of  $Y_{ad}$ ).

Suppose  $I$  increases. Due to the upward slope of  $Y_{ad}$ , aggregate output will increase more than the increase in  $I$ . This is called the *expenditure multiplier* and it is summed up by the following equation:

$$Y = (a + I) \times 1/(1 - mpc)$$

So if  $a$  is 200 billion,  $I$  is 400 billion, and  $mpc$  is .5,  $Y$  will be

$$Y = 600 \times 1/.5 = 600 \times 2 = \$1,200 \text{ billion}$$

If  $I$  increases to 600 billion,  $Y = 800 \times 2 = \$1,600$  billion.

If the marginal propensity to consume were to increase to .75,  $Y$  would increase to

$Y = 800 \times 1/.25 = 800 \times 4 = \$3,200$  billion because  $Y_{ad}$  would have a much steeper slope. A decline in  $mpc$  to .25, by contrast, would flatten  $Y_{ad}$  and lead to a lower equilibrium:

$$Y = 800 \times 1/.75 = 800 \times 1.333 = \$1,066.67 \text{ billion}$$

Practice calculating aggregate output in Exercise 2.

2. Calculate aggregate output with the formula:  $Y = (a + I) \times 1/(1 - mpc)$

Autonomous Spending	Marginal Propensity to Consume	Investment	Answer: Aggregate Output
200	0.5	500	1400
300	0.5	500	1600
400	0.5	500	1800
500	0.5	500	2000
500	0.6	500	2500

Autonomous Spending	Marginal Propensity to Consume	Investment	Answer: Aggregate Output
200	0.7	500	2333.33
200	0.8	500	3500
200	0.4	500	1166.67
200	0.3	500	1000
200	0.5	600	1600
200	0.5	700	1800
200	0.5	800	2000
200	0.5	400	1200
200	0.5	300	1000
200	0.5	200	800

### Stop and Think Box

During the Great Depression, investment (I) fell from \$232 billion to \$38 billion (in 2000 USD). What happened to aggregate output? How do you know?

Aggregate output fell by more than \$232 billion - \$38 billion = \$194 billion. We know that because investment fell and the marginal propensity to consume was  $> 0$ , so the fall was more than \$194 billion, as expressed by the equation  $Y = (a + I) \times 1/(1 - mpc)$ .

*To make the model more realistic, we can easily add NX to the equation. An increase in exports over imports will increase aggregate output Y by the increase in NX times the expenditure multiplier. Likewise, an increase in imports over exports (a decrease in NX) will decrease Y by the decrease in NX times the multiplier.*



Government spending ( $G$ ) also increases  $Y$ . We must realize, however, that some government spending comes from taxes, which consumers view as a reduction in income. With taxation, the consumption function becomes the following:

$$C = a + mpc \times (Y_d - T)$$

$T$  means taxes. The effect of  $G$  is always larger than that of  $T$  because  $G$  expands by the multiplier, which is always  $> 1$ , while  $T$  is multiplied by MPC, which never exceeds 1. So increasing  $G$ , even if it is totally funded by  $T$ , will increase  $Y$ . (Remember, this is a short-run analysis.) *Nevertheless, Keynes argued that, to help a country out of recession, government should cut taxes because that will cause  $Y_d$  to rise, ceteris paribus. Or, in more extreme cases, it should borrow and spend (rather than tax and spend) so that it can increase  $G$  without increasing  $T$  and thus decreasing  $C$ .*

### Stop and Think Box

As noted in [Chapter 11 "The Economics of Financial Regulation"](#), many governments, including that of the United States, responded to the Great Depression by increasing tariffs in what was called a beggar-thy-neighbor policy. Today we know that such policies beggared everyone. What were policymakers thinking?

They were thinking that tariffs would decrease imports and thereby increase  $NX$  (exports minus imports) and  $Y$ . That would make their trading partner's  $NX$  decrease, thus beggaring them by decreasing their  $Y$ . It was a simple idea on paper, but in reality it was dead wrong. For starters, other countries retaliated with tariffs of their own. But even if they did not, it was a losing strategy because by making neighbors (trading partners) poorer, the policy limited their ability to import (i.e., decreased the first country's exports) and thus led to no significant long-term change in  $NX$ .

**Figure 21.3 "The determinants of aggregate demand"** sums up the discussion of aggregate demand.

Figure 21.3 *The determinants of aggregate demand*

Variable	Change in Variable	Change in Y
a	Up	Up
I	Up	Up
NX	Up	Up
G	Up	Up
T	Up	Down
Imports	Up	Down
Exports	Up	Up
mpc	Up	Up

## KEY TAKEAWAYS

- The equation  $Y = Y_{ad} = C + I + G + NX$  tells us that aggregate output (or aggregate income) is equal to aggregate demand, which in turn is equal to consumer expenditure plus investment (planned, physical stuff) plus government spending plus net exports (exports – imports).
- It is important because it allows economists to model aggregate output (to discern why, for example, GDP changes).
- In a taxless Eden, like the Gulf Cooperation Council countries, consumer expenditure equals autonomous consumer expenditure (spending on necessities) ( $a$ ) plus the marginal propensity to consume ( $mpc$ ) times disposable income ( $Y_d$ ), income above  $a$ .
- In the rest of the world,  $C = a + mpc \times (Y_d - T)$ , where  $T$  = taxes.
- $C$ , particularly the marginal propensity to consume variable, is important because it gives the aggregate demand curve in a Keynesian cross diagram its upward slope.
- A Keynesian cross diagram is a graph with aggregate demand ( $Y_{ad}$ ) on the vertical axis and aggregate output ( $Y$ ) on the horizontal.
- It consists of a 45-degree line where  $Y = Y_{ad}$  and a  $Y_{ad}$  curve, which plots  $C + I + G + NX$  with the slope given by the expenditure multiplier, which is the reciprocal of 1 minus the marginal propensity to consume:  $Y = (a + I + NX + G) \times 1/(1 - mpc)$ .
- The diagram helps us to see that aggregate output is directly related to  $a$ ,  $I$ , exports,  $G$ , and  $mpc$  and indirectly related to  $T$  and imports.

## 21.2 The IS-LM Model

### LEARNING OBJECTIVES

1. What are the IS and LM curves?
2. What are their characteristics?
3. What do we learn when we combine the IS and the LM curves on one graph?
4. Why is equilibrium achieved?
5. What is the IS-LM model's biggest drawback?

*The Keynesian cross diagram framework is great, as far as it goes.* Note that it has nothing to say about interest rates or money, a major shortcoming for us students of money, banking, and monetary policy! It does, however, help us to build a more powerful model that examines equilibrium in the markets for goods and money, the IS (investment-savings) and the LM (liquidity preference–money) curves, respectively (hence the name of the model).

*Interest rates are negatively related to I and to NX.* The reasoning here is straightforward. When interest rates ( $i$ ) are high, companies would rather invest in bonds than in physical plant (because fewer projects are **positive net present value**<sup>2</sup> or **+NPV**<sup>3</sup>) or inventory (because it has a high opportunity cost), so  $I$  (investment) is low. When rates are low, new physical plant and inventories look cheap and many more projects are +NPV ( $i$  has come down in the denominator of the present value formula), so  $I$  is high. Similarly, when  $i$  is low, as we learned in [Chapter 18 "Foreign Exchange"](#), the domestic currency will be weak, all else equal. Exports will be facilitated and imports will decline because foreign goods will look expensive. Thus,  $NX$  will be high (exports > imports). When  $i$  is high, by contrast, the domestic currency will be in demand and hence strong. That will hurt exports and increase imports, so  $NX$  will drop and perhaps become negative (exports < imports).

2. A project likely to be profitable at a given interest rate after comparing the present values of both expenditures and revenues. This will make more sense after you navigate [Chapter 4 "Interest Rates"](#).

3. See *positive net present value*.

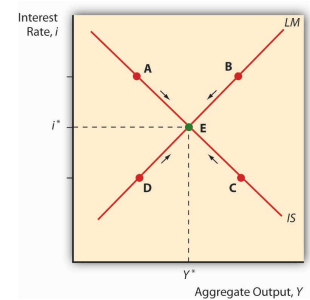
Now think of  $Y_{ad}$  on a Keynesian cross diagram. As we saw above, aggregate output will rise as  $I$  and  $NX$  do. So we know that as  $i$  increases,  $Y_{ad}$  decreases, *ceteris paribus*. *Plotting the interest rate on the vertical axis against aggregate output on the horizontal axis, as below, gives us a downward sloping curve. That's the IS curve!* For each interest rate, it tells us at what point the market for goods ( $I$  and  $NX$ , get it?) is in equilibrium. For all points to the right of the curve, there is an excess supply of goods for that interest rate, which causes firms to decrease inventories, leading to a

fall in output toward the curve. For all points to the left of the IS curve, an excess demand for goods persists, which induces firms to increase inventories, leading to increased output toward the curve.

Obviously, the IS curve alone is as insufficient to determine  $i$  or  $Y$  as demand alone is to determine prices or quantities in the standard supply and demand microeconomic price model. We need another curve, one that slopes the other way, which is to say, upward. *That curve is called the LM curve and it represents equilibrium points in the market for money.* Recall from our discussions of liquidity preference in [Chapter 5 "The Economics of Interest-Rate Fluctuations"](#) and [Chapter 20 "Money Demand"](#) that the demand for money is positively related to income because more income means more transactions and because more income means more assets, and money is one of those assets. So we can immediately plot an upward sloping LM curve. To the left of the LM curve there is an excess supply of money given the interest rate and the amount of output. That'll cause people to use their money to buy bonds, thus driving bond prices up, and hence  $i$  down to the LM curve. To the right of the LM curve, there is an excess demand for money, inducing people to sell bonds for cash, which drives bond prices down and hence  $i$  up to the LM curve.

*When we put the IS and LM curves on the graph at the same time, as in [Figure 21.4 "IS-LM diagram: equilibrium in the markets for money and goods"](#), we immediately see that there is only one point, their intersection, where the markets for both goods and money are in equilibrium. Both the interest rate and aggregate output are determined by that intersection. We can then shift the IS and LM curves around to see how they affect interest rates and output,  $i^*$  and  $Y^*$ . In the next chapter, we'll see how policymakers manipulate those curves to increase output. But we still won't be done because, as mentioned above, the IS-LM model has one major drawback: it works only in the short term or when the price level is otherwise fixed.*

*Figure 21.4 IS-LM diagram: equilibrium in the markets for money and goods*

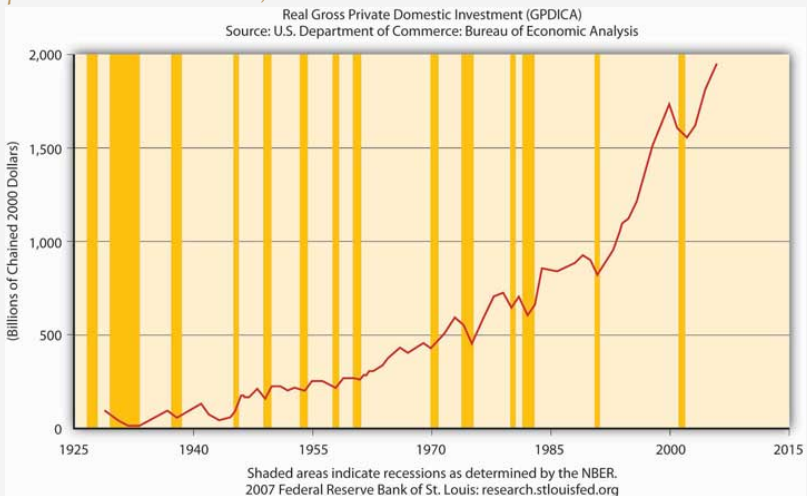


### Stop and Think Box

Does Figure 21.5 "Real gross private domestic investment, 1925–2007" make sense? Why or why not? What does Figure 21.6 "Net exports, 1945–2007" mean? Why is Figure 21.7 "Federal government expenditures, 1945–2007" not a good representation of  $G$ ?

**Figure 21.5**

*Real gross private domestic investment, 1925–2007*



**Figure 21.6**

*Net exports, 1945–2007*

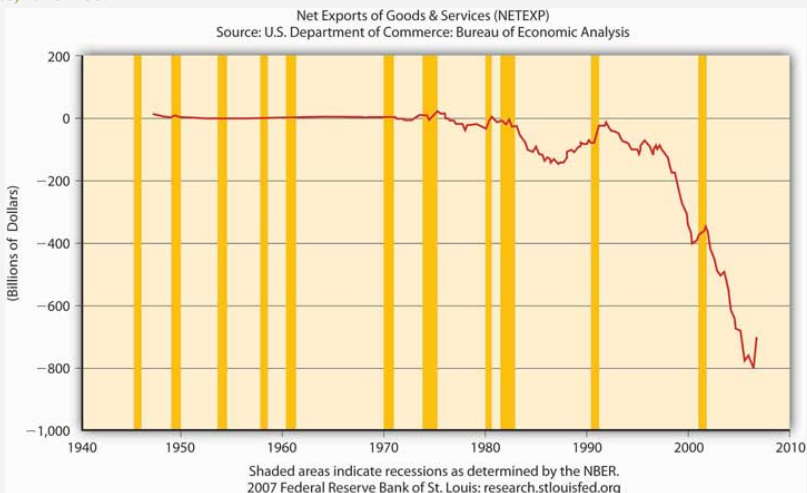


Figure 21.7

Federal government expenditures, 1945–2007

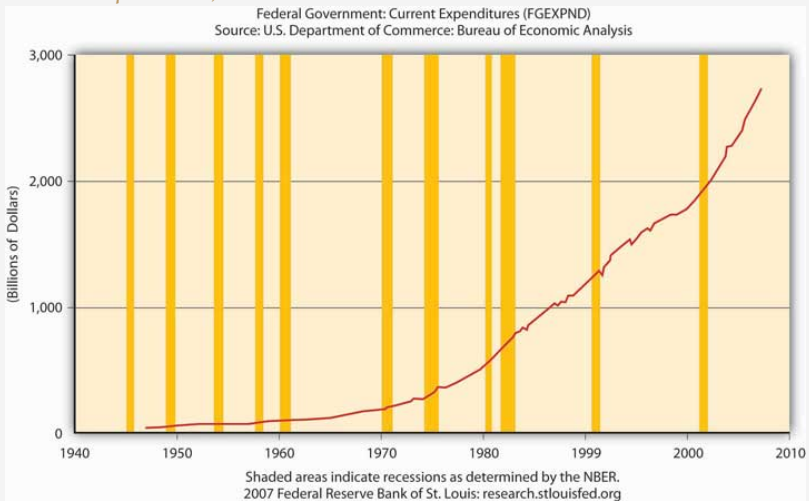


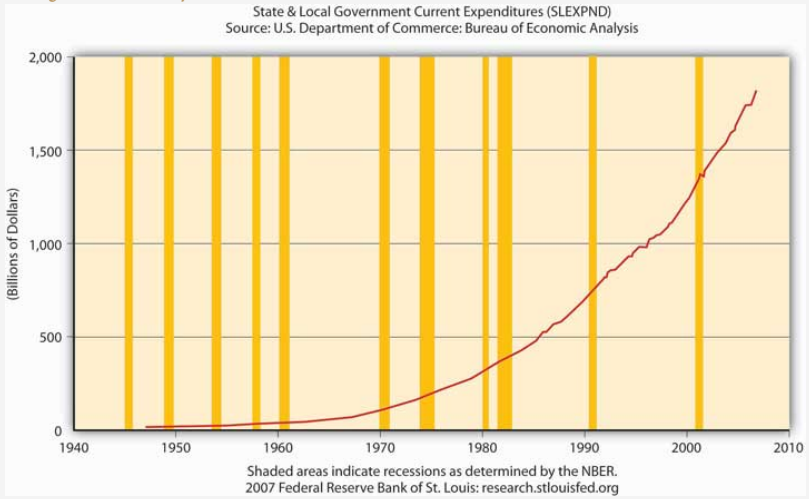
Figure 21.5 "Real gross private domestic investment, 1925–2007" makes perfectly good sense because it depicts  $I$  in the equation  $Y = Y_{ad} = C + I + G + NX$ , and the shaded areas represent recessions, that is, decreases in  $Y$ . Note that before almost every recession in the twentieth century,  $I$  dropped.

Figure 21.6 "Net exports, 1945–2007" means that  $NX$  in the United States is considerably negative, that exports < imports by some \$800 billion, creating a significant drain on  $Y$  (GDP).

Figure 21.7 "Federal government expenditures, 1945–2007" is not a good representation of  $G$  because it ignores state and local government expenditures, which are significant in the United States, as Figure 21.8 "State and local government expenditures, 1945–2007" shows.

**Figure 21.8**

*State and local government expenditures, 1945–2007*





## KEY TAKEAWAYS

- The IS curve shows the points at which the quantity of goods supplied equals those demanded.
- On a graph with interest ( $i$ ) on the vertical axis and aggregate output ( $Y$ ) on the horizontal axis, the IS curve slopes downward because, as the interest rate increases, key components of  $Y$ ,  $I$  and  $NX$ , decrease. That is because as  $i$  increases, the opportunity cost of holding inventory increases, so inventory levels fall and +NPV projects involving new physical plant become rarer, and  $I$  decreases.
- Also, high  $i$  means a strong domestic currency, all else constant, which is bad news for exports and good news for imports, which means  $NX$  also falls.
- The LM curve traces the equilibrium points for different interest rates where the quantity of money demanded equals the quantity of money supplied.
- It slopes upward because as  $Y$  increases, people want to hold more money, thus driving  $i$  up.
- The intersection of the IS and LM curves indicates the macroeconomy's equilibrium interest rate ( $i^*$ ) and output ( $Y^*$ ), the point where the market for goods and the market for money are both in equilibrium.
- At all points to the left of the LM curve, an excess supply of money exists, inducing people to give up money for bonds (to buy bonds), thus driving bond prices up and interest rates down toward equilibrium.
- At all points to the right of the LM curve, an excess demand for money exists, inducing people to give up bonds for money (to sell bonds), thus driving bond prices down and interest rates up toward equilibrium.
- At all points to the left of the IS curve, there is an excess demand for goods, causing inventory levels to fall and inducing companies to increase production, thus leading to an increase in output.
- At all points to the right of the IS curve, there is an excess supply of goods, creating an inventory glut that induces firms to cut back on production, thus decreasing  $Y$  toward the equilibrium.
- The IS-LM model's biggest drawback is that it doesn't consider changes in the price level, so in most modern situations, it's applicable in the short run only.

## 21.3 Suggested Reading

Dimand, Robert, Edward Nelson, Robert Lucas, Mauro Boianovsky, David Colander, Warren Young, et al. *The IS-LM Model: Its Rise, Fall, and Strange Persistence*. Raleigh, NC: Duke University Press, 2005.

Young, Warren, and Ben-Zion Zilbeparb. *IS-LM and Modern Macroeconomics*. New York: Springer, 2001.